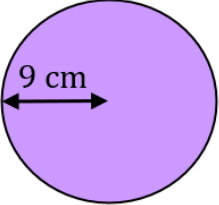
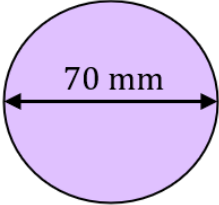
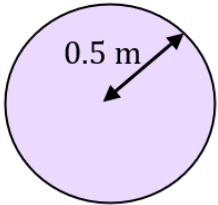


## Area of a Circle

<b>(a)</b>	<b>(b)</b>	<b>(c)</b>	<b>(d)</b>
Find the radius of a circle when the diameter is 5 cm	Find the radius of a circle when the diameter is 8.2 m	Find the diameter of a circle when the radius is 47 mm	Find the diameter of a circle when the radius is 0.7 m
<b>(e)</b>	<b>(f)</b>	<b>(g)</b>	<b>(h)</b>
Find the area of a circle with a radius of 6 cm	Find the area of a circle with a radius of 80 mm	Find the area of a circle with a radius of 3.5 m	Find the area of a circle with a radius of 13.5 cm
<b>(i)</b>	<b>(j)</b>	<b>(k)</b>	<b>(l)</b>
Find the area of a circle with a diameter of 30 mm	Find the area of a circle with a diameter of 1.8 m	Find the area of a circle with a diameter of 26 mm	Find the area of a circle with a diameter of 45 cm
<b>(m)</b>	<b>(n)</b>	<b>(o)</b>	<b>(p)</b>
Find the area of the circle shown to 1 decimal place. 	Find the area of the circle shown to 1 decimal place. 	Find the area of the circle shown to 1 decimal place. 	Find the area of the circle shown to 1 decimal place. 