
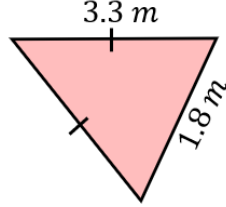
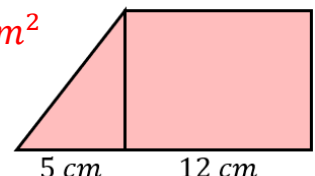
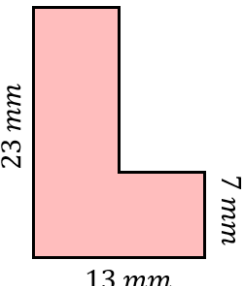

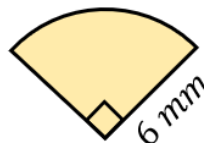
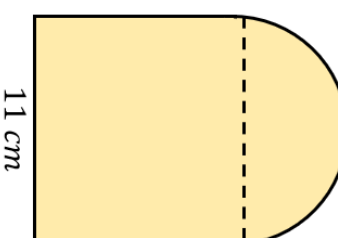

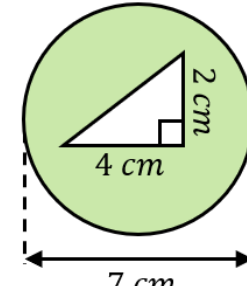
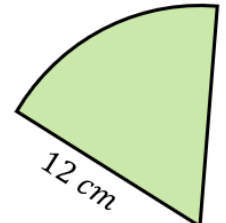


Area and Perimeter Revision

(a)	(b)	(c)	(d)
<p>Find the area.</p> <p style="text-align: center;">11 cm</p>  <p style="text-align: center;">14 cm</p> <p style="text-align: right; color: red;">62.5 cm^2</p>	<p>Find the perimeter of the triangle.</p>  <p style="text-align: right; color: red;">8.4 m</p>	<p>The area of the triangle is 20 cm^2. Find the area of the rectangle.</p> <p style="color: red;">96 cm^2</p> 	<p>Find the perimeter.</p>  <p style="text-align: right; color: red;">72 mm</p>
(e)	(f)	(g)	(h)
<p>Find the area of the semi-circle to 1 decimal place.</p>  <p style="text-align: center;">8 cm</p> <p style="text-align: right; color: red;">25.1 cm^2</p>	<p>Find the perimeter to 3 significant figures.</p>  <p style="text-align: right; color: red;">21.4 mm</p>	<p>Find the perimeter to 1 decimal place.</p>  <p style="text-align: right; color: red;">48.3 cm</p>	<p>Find the area, giving your answer to 1 decimal place.</p>  <p style="text-align: right; color: red;">5.3 m^2</p>
(i)	(j)	(k)	
 <p style="text-align: right; color: red;">34.5 cm^2</p>	<p>The area of the sector is $24\pi \text{ cm}^2$. Find the perimeter of the sector in terms of π.</p>  <p style="text-align: right; color: red;">$\text{angle} = 60^\circ$</p> <p style="text-align: right; color: red;">$P = (4\pi + 24) \text{ cm}$</p>	<p>A circular lawn is surrounded by a path of constant width 2 m. The area of the path is $30\pi \text{ m}^2$. Find the area of the lawn in terms of π.</p> <p style="text-align: right; color: red;">$\frac{169\pi}{4} \text{ cm}^2$</p> 