

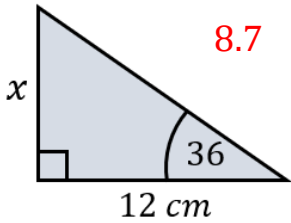
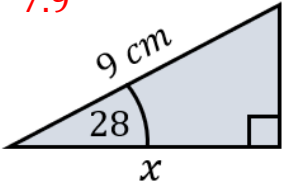
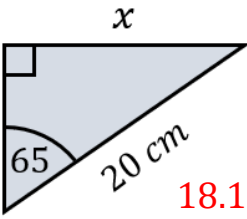
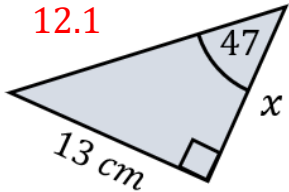
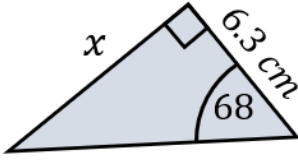
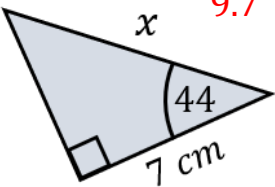
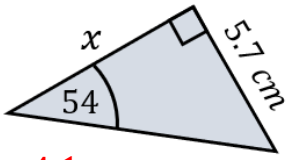
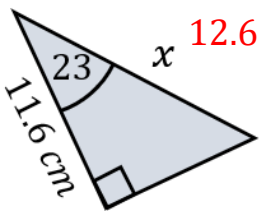
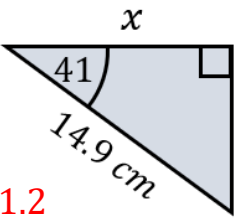
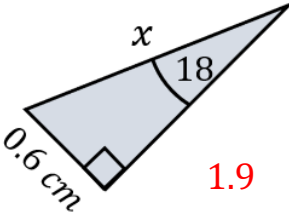
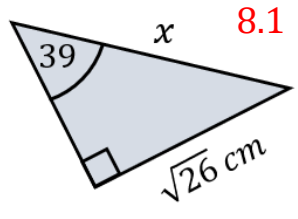
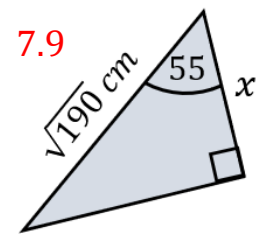
# Name the Film

# Using Trigonometry to Find Lengths

A	B	C	D	E	F	G	H	I	J	K	L	M
7.9	4.1	1.9	3.2	8.1	24.0	19.7	11.2	0.6	4.2	15.6	18.1	11.3

N	O	P	Q	R	S	T	U	V	W	X	Y	Z
8.7	10.7	9.7	5.0	12.6	7.1	12.1	3.2	16.5	7.8	6.6	2.5	8.5

Calculate each length  $x$  in  $cm$  to 1 decimal place, find your answers in the table and unjumble the letters to find the name of a film:

Letters:	N	A	L	T	K	P	B	R	H	C	E	A	Film:	BLACK PANTHER
----------	---	---	---	---	---	---	---	---	---	---	---	---	-------	---------------