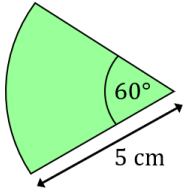
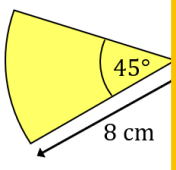
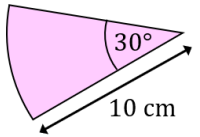
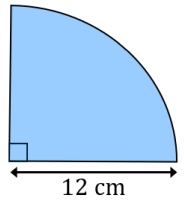
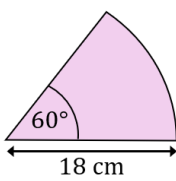
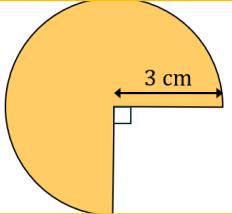
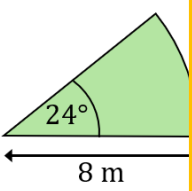
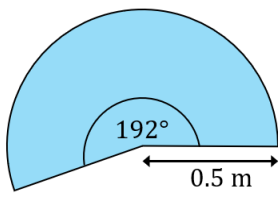
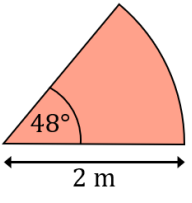
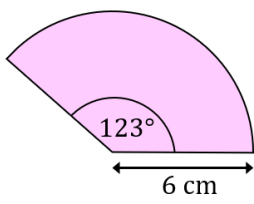
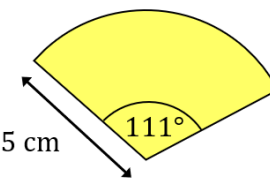
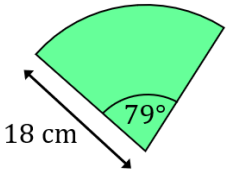
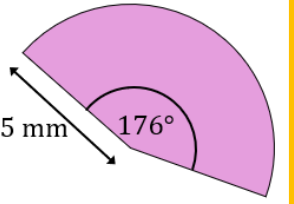
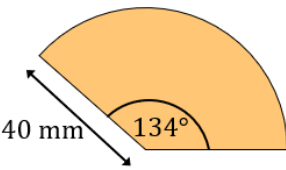
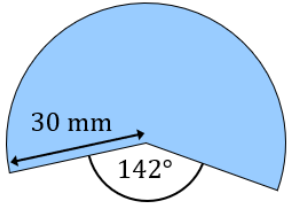
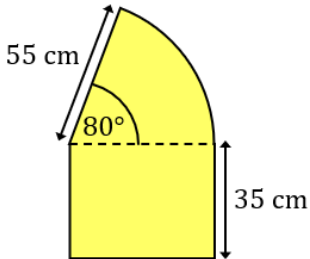
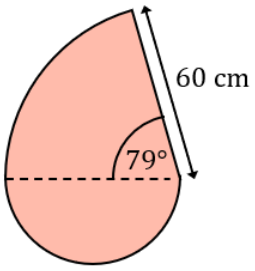


Odd One Out Arc Length and Perimeter of Sectors

Work out the length required for each sector. Colour the odd one out on each row.

<p>1</p>	<p>Find the arc length</p> 	<p>Find the arc length</p> 	<p>Find the arc length</p> 
<p>2</p>	<p>Find the arc length</p> 	<p>Find the arc length</p> 	<p>Find the arc length</p> 
<p>3</p>	<p>Find the arc length</p> 	<p>Find the arc length</p> 	<p>Find the arc length</p> 
<p>4</p>	<p>Find the perimeter to the nearest integer</p> 	<p>Find the perimeter to the nearest integer</p> 	<p>Find the arc length to the nearest integer</p> 
<p>5</p>	<p>Find the perimeter to the nearest integer</p> 	<p>Find the perimeter to the nearest integer</p> 	<p>Find the perimeter to the nearest integer</p> 
<p>6</p>	<p>Find the perimeter to 3 significant figures</p> 	<p>Find the perimeter to 3 significant figures</p> 	<p>Find the perimeter to 3 significant figures</p> 