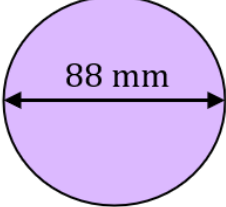
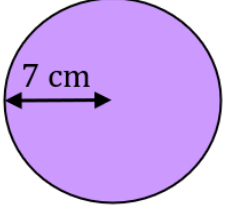
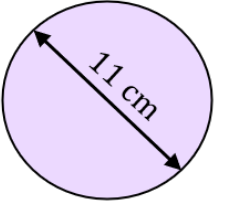
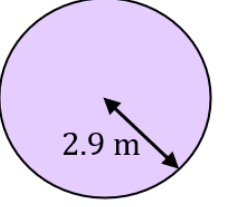


Circumference of a Circle

(a)	(b)	(c)	(d)
Find the diameter of a circle when the radius is 9 cm	Find the diameter of a circle when the radius is 6.5 m	Find the radius of a circle when the diameter is 60 mm	Find the radius of a circle when the diameter is 2.6 m
18 cm	13 m	30 mm	1.3 m
(e)	(f)	(g)	(h)
Find the circumference of a circle with a diameter of 12 cm	Find the circumference of a circle with a diameter of 67 mm	Find the circumference of a circle with a diameter of 3.7 m	Find the circumference of a circle with a diameter of 35 cm
37.7 cm	210.5 mm	11.6 m	110.0 cm
(i)	(j)	(k)	(l)
Find the circumference of a circle with a radius of 25 mm	Find the circumference of a circle with a radius of 8 cm	Find the circumference of a circle with a radius of 0.7 m	Find the circumference of a circle with a radius of 13 cm
157.1 mm	50.3 cm	4.4 m	81.7 cm
(m)	(n)	(o)	(p)
Find the circumference of the circle shown to 1 decimal place.	Find the circumference of the circle shown to 1 decimal place.	Find the circumference of the circle shown to 1 decimal place.	Find the circumference of the circle shown to 1 decimal place.
 <p style="text-align: center;">88 mm</p>	 <p style="text-align: center;">7 cm</p>	 <p style="text-align: center;">11 cm</p>	 <p style="text-align: center;">2.9 m</p>
276.5 mm	44.0 cm	34.6 cm	18.2 m