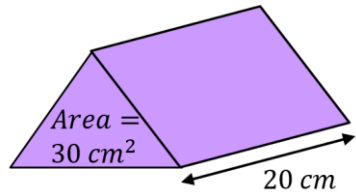
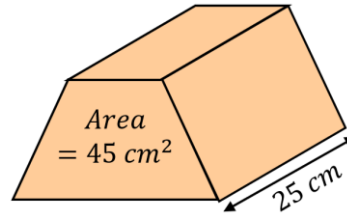


Volume of a Prism

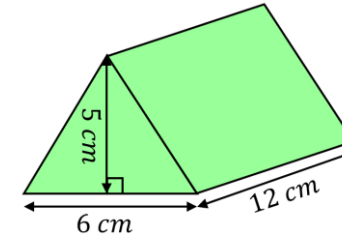
Find the volume of each of these prisms. Include units with your answers.



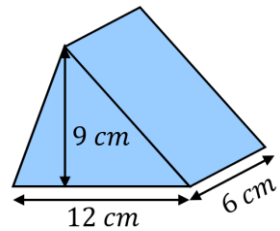
600 cm^3



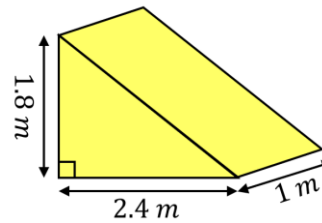
1125 cm^3



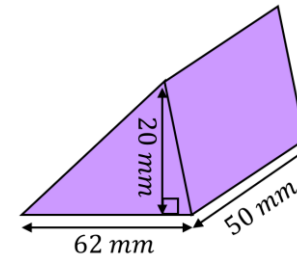
180 cm^3



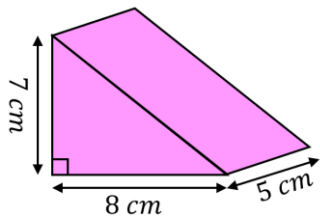
324 cm^3



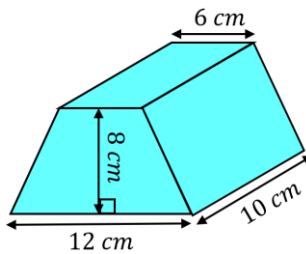
2.16 m^3



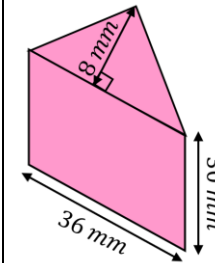
31000 mm^3



140 cm^3

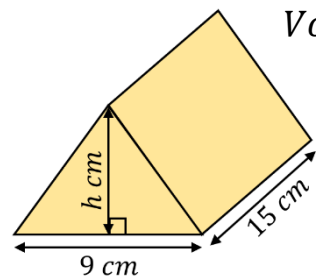


720 cm^3

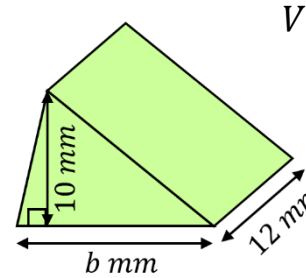


4320 mm^3

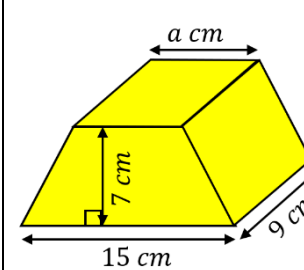
Find the missing measurements in these prisms.



$h = 12 \text{ cm}$



$b = 15 \text{ mm}$



$a = 7 \text{ cm}$