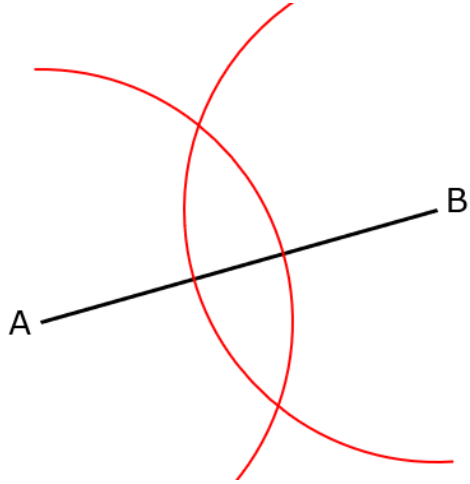


## Perpendicular Bisectors and Angle Bisectors

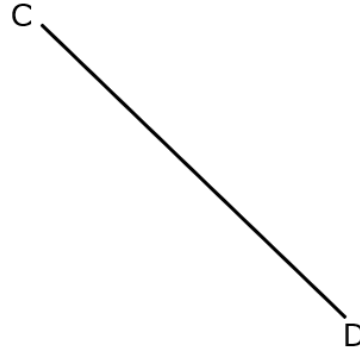
**(a)**

Complete the perpendicular bisector of the line AB



**(b)**

Construct the perpendicular bisector of the line CD



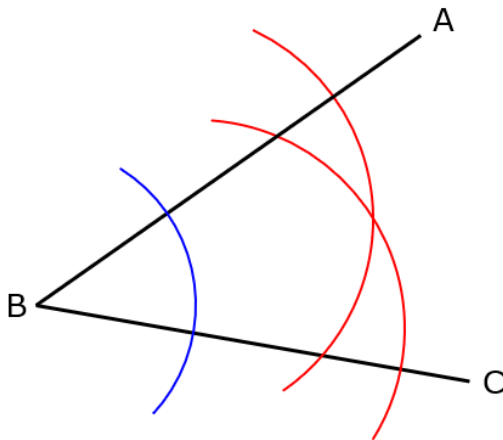
**(c)**

Construct the perpendicular bisector of the line EF



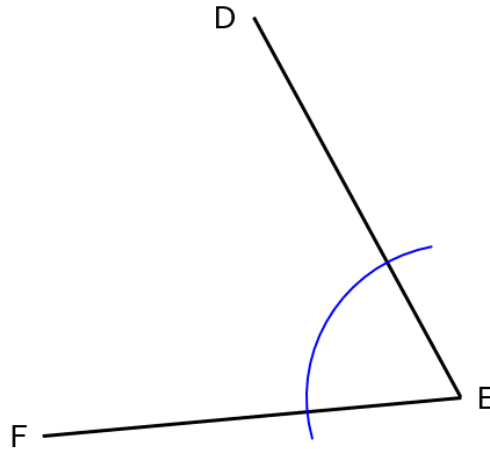
**(d)**

Complete the bisector of the angle ABC



**(e)**

Construct the bisector of the angle DEF



**(f)**

Construct the bisector of the angle GHJ

