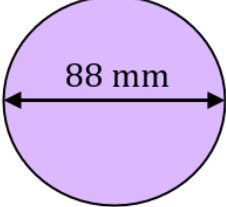
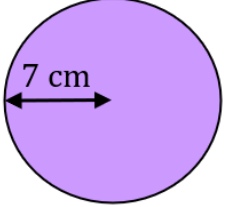
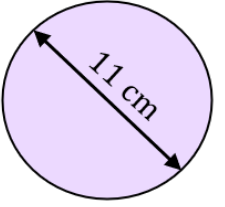


## Circumference of a Circle

<b>(a)</b>	<b>(b)</b>	<b>(c)</b>	<b>(d)</b>
Find the diameter of a circle when the radius is 9 cm	Find the diameter of a circle when the radius is 6.5 m	Find the radius of a circle when the diameter is 60 mm	Find the radius of a circle when the diameter is 2.6 m
<b>(e)</b>	<b>(f)</b>	<b>(g)</b>	<b>(h)</b>
Find the circumference of a circle with a diameter of 12 cm	Find the circumference of a circle with a diameter of 67 mm	Find the circumference of a circle with a diameter of 3.7 m	Find the circumference of a circle with a diameter of 35 cm
<b>(i)</b>	<b>(j)</b>	<b>(k)</b>	<b>(l)</b>
Find the circumference of a circle with a radius of 25 mm	Find the circumference of a circle with a radius of 8 cm	Find the circumference of a circle with a radius of 0.7 m	Find the circumference of a circle with a radius of 13 cm
<b>(m)</b>	<b>(n)</b>	<b>(o)</b>	<b>(p)</b>
Find the circumference of the circle shown to 1 decimal place. 	Find the circumference of the circle shown to 1 decimal place. 	Find the circumference of the circle shown to 1 decimal place. 	Find the circumference of the circle shown to 1 decimal place. 