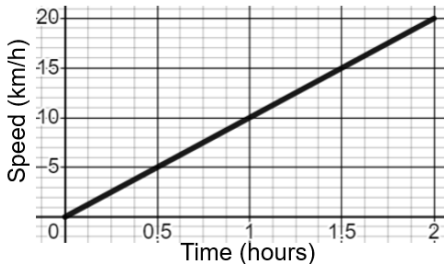


## Speed-Time Graphs

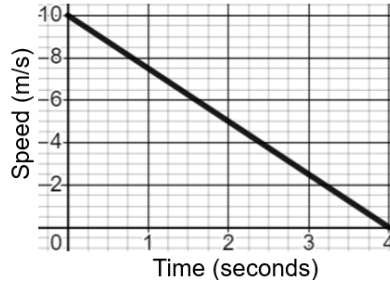
**(a)**

Find the acceleration.



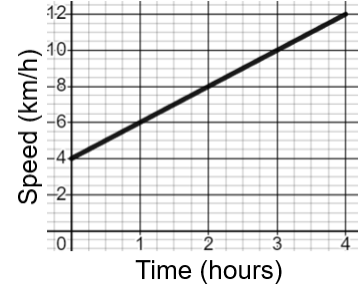
**(b)**

Find the deceleration.



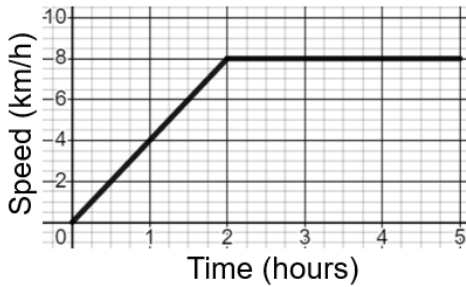
**(c)**

Find the acceleration.



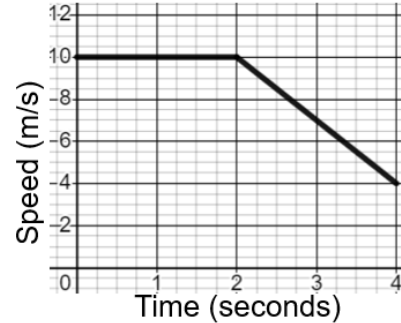
**(d)**

Describe each step of the journey, stating the values of any acceleration or deceleration.



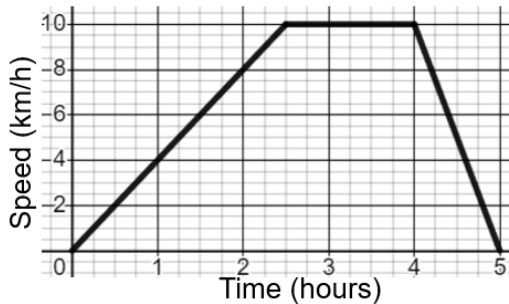
**(e)**

Describe each step of the journey, stating the values of any acceleration or deceleration.



**(f)**

Describe each stage of the speed-time graph, calculating the values of any acceleration and deceleration.



**(g)**

Describe each stage of the speed-time graph, calculating the values of any acceleration and deceleration.

